



# Aakash

## Medical | IIT-JEE | Foundations

(Divisions of Aakash Educational Services Pvt. Ltd.)

Regd. Office : Aakash Tower, 8, Pusa Road, New Delhi-110005

Ph.: 011-47623456 Fax : 011-47623472

Time : 3 Hours

# Answers & Solutions

Max. Marks : 200

*for*

## NTSE (Stage-I) 2017-18

### INSTRUCTIONS TO CANDIDATES

- Use blue/black ball point pen only. There is no negative marking.
- This test booklet contains 200 questions of one mark each. All the questions are compulsory.
- Part-I : MAT : 1 - 50 questions  
Part-II : Language : 51 - 100 questions  
Part-III : SAT : 101 - 200 questions
- Answer each question by darkening the one correct alternative among the four choices on the OMR Sheet with blue/black ball point pen.

Example :

Q. No.	Alternatives
Correct way :	1    ①   ②   ●   ④
Q. No.	Alternatives
Wrong way :	1    ⊗   ⊕   ③   ④

Student must darkening the right oval only after ensuring correct answer on OMR Sheet.

- Disparity in mentioning (SC, ST & PH) in application form and OMR Sheet can make your candidature invalid.
- Students are not allowed to scratch/ alter/ change out an answer once marked on OMR Sheet, by using white fluid/ eraser/ blade/ tearing/ wearing or in any other form.
- Separate Sheet has been provided for rough work in this test booklet.
- Please handover the OMR Sheet to the invigilator before leaving the Examination Hall.  
\*Take all your question booklets with you.
- Darken completely the ovals of your answers on OMR Sheet in the time limit allotted for that particular paper.
- Your OMR Sheet will be evaluated through electronic scanning process. Incomplete and incorrect entries may render your OMR Sheet invalid.
- Use of electronic gadgets, calculator, mobile etc., is strictly prohibited.

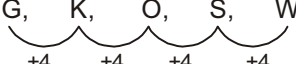
## PART-I : MENTAL ABILITY TEST (MAT)

**Direction :** In each of the questions 1 to 4 a letter series is given with one term missing shown by question mark (?). This term is one of four alternatives given under it. Find the right alternative.

1. G, K, O, S, ?.

- (1) U (2) W  
(3) V (4) X

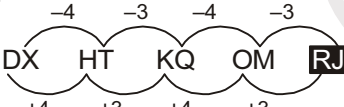
**Answer (2)**

**Sol.** G, K, O, S, W  


2. DX, HT, KQ, OM, ?.

- (1) SJ (2) RK  
(3) QJ (4) RJ

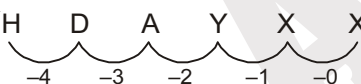
**Answer (4)**

**Sol.** DX, HT, KQ, OM, RJ  


3. H, D, A, Y, X, ?.

- (1) X (2) W  
(3) T (4) V

**Answer (1)**

**Sol.** H, D, A, Y, X, X  


4. KLE, IND, GPC, ?, CTA.

- (1) DRB (2) BSE  
(3) ERB (4) ECR

**Answer (3)**

**Direction :** In each of the questions 5 to 8 a number series is given with one term missing shown by question mark (?). This term is one of the four alternatives given under it. Find the right alternative.

5. 4, 9, 25, ?, 121, 169.

- (1) 36 (2) 49  
(3) 64 (4) 81

**Answer (2)**

6. 1, 3, 7, 13, 21, ?, 43, 57.

- (1) 31 (2) 29  
(3) 30 (4) 32

**Answer (1)**

7. 5, 3, 10, 8, 17, 15, ?, 24.

- (1) 25 (2) 23  
(3) 26 (4) 27

**Answer (3)**

8. 97, 77, 59, ?, 29, 17.

- (1) 34 (2) 39  
(3) 37 (4) 43

**Answer (4)**

9. In the given question there are two statements and they have two conclusion I and II. You have to take the given statements to be true even if they seem to vary to commonly known facts. Read the conclusions and decide which of the given conclusions logically follows from the two given statements even disregarding commonly known facts.

Statements : (i) All women are intelligent.

(ii) Some women are educated.

Conclusions : (I) All educated women are intelligent.

(ii) All intelligent are women.

(1) Only conclusion I is true

(2) Only conclusion II is true

(3) Both conclusions I and II are true

(4) Neither conclusion I nor conclusion II is true

**Answer (1)**

**Sol.**  or 

10. In the given question, a statement is followed by two arguments I and II. You have to decide which of the following arguments is 'strong' or 'weak'.

**Statement:** Continuous and comprehensive evaluation system should be implemented at school level.

**Arguments:** (I) Yes, it helps in all-round development of the child.

(II) No, it puts more burden on teachers.

(1) Arguments I and II both are strong

(2) Arguments I and II both are weak

(3) Arguments I is strong and II is weak

(4) Argument I is weak and II is strong.

**Answer (3)**

11. In the question given below, a statement is followed by a reason. Choose correct option for them.

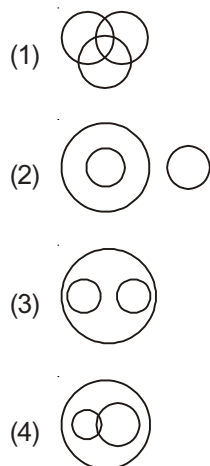
**Statement** : Narmada river flows to west.

**Reason** : Narmada river falls in the Bay of Bengal.

- (1) Statement and reason both are true
- (2) Statement is true but reason is false
- (3) Statement is false but reason it true
- (4) Statement and reason both are false.

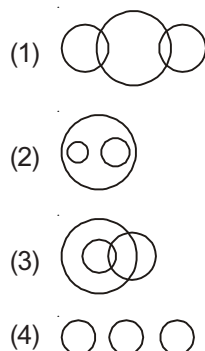
**Answer (2)**

12. Which of the following Venn diagrams correctly represents Bus, Car and Vehicle?



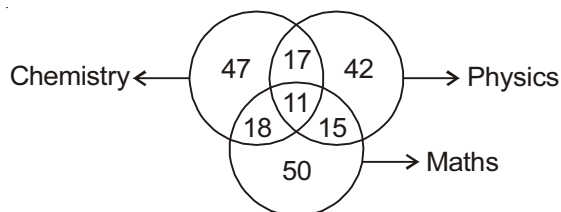
**Answer (3)**

13. Which of the following Venn diagrams correctly represents white colour, clothes and natural flowers?



**Answer (1)**

**Direction** : Out of 500 students, the following Venn diagram represents the number of students who got Distinction in Physics, Chemistry and Maths subjects. Answer Q. 14 and Q. 15 based on Venn diagram.



14. How many students got Distinction in both Physics and Maths subjects, when the students who got Distinction in Chemistry subject is not included?

- (1) 26
- (2) 15
- (3) 28
- (4) 24

**Answer (2)**

15. What is the percentage of students who got Distinction in all the three subjects?

- (1) 28%
- (2) 35%
- (3) 38%
- (4) 40%

**Answer (+)**

**Direction** : In questions 16 and 17 three alternatives are alike in a certain way but the rest one is different. Find out the odd one and write correct answer.

16. (1) Afghanistan  
(2) Kabul  
(3) Spain  
(4) Iraq

**Answer (2)**

17. (1) 1  
(2) 729  
(3) 144  
(4) 64

**Answer (3)**

18. 'A + B' means A is the son of B. 'A – B' means A is the wife of B. Then what does P + R – Q mean?

- (1) Q is the father of P
- (2) Q is the son of P
- (3) P is the father of Q
- (4) R is the son of Q

**Answer (1)**

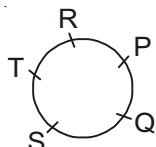
**Sol.**  $R^+ - Q^-$   
|  
 $P^-$   
 $\therefore$  Q is the father of P

19. P, Q, R, S and T are sitting around a circular table facing centre to the table. R is just the right to P and is second to the left of S. T is not between P and S. Who is second to the left of R?

- (1) Q
- (2) S
- (3) T
- (4) P

**Answer (1)**

**Sol.**



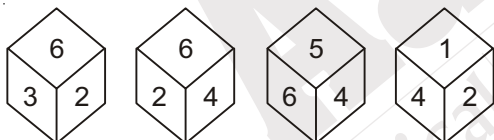
20. If '<' means '-', '>' means '+', '=' means 'x' and '\$' means '÷', then what will be the value of  $27 > 81 \$ 9 < 6$ ?

- (1) 6
- (2) 36
- (3) 30
- (4) 54

**Answer (3)**

**Sol.**  $27 + 81 \div 9 - 6 = 30$

21. The four different positions of the dice are given below. Which number is on the face opposite to 6?



- (1) 1
- (2) 2
- (3) 3
- (4) 4

**Answer (1)**

22. All faces of a solid cube of edge 8 cm are coloured. It is divided equally in the cubes of edge 2cm. How many cubes will have all faces coloured?

- (1) 1
- (2) 0
- (3) 8
- (4) 4

**Answer (2)**

**Sol.** No. of cubes will have all face coloured = 0

23. In a coded language the word 'SOLID' is written as 'HLORW', then in the same code language 'GAS' will be written as

- (1) T H Z
- (2) T Y I
- (3) T Z H
- (4) Z H T

**Answer (3)**

24. If in a certain code I = 9 and GIRL = 46 then BOY = ?

- (1) 37
- (2) 39
- (3) 24
- (4) 42

**Answer (4)**

**Sol.** BOY

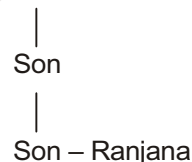
$$2 + 15 + 25 = 42$$

25. If Ranjana is the sister of the son of Sohan's son, how is Ranjana related to Sohan?

- (1) Daughter
- (2) Sister
- (3) Granddaughter
- (4) Uncle

**Answer (3)**

**Sol.** Sohan

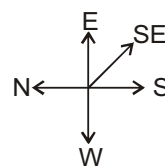


26. If North direction is called East and South direction is called West, then what will be called North-East direction?

- (1) North-East
- (2) East-South
- (3) West-South
- (4) North-West

**Answer (2)**

**Sol.** NE  $\Rightarrow$  SE



27. How many pairs of successive numbers have a difference of 2 in the following sequence?  
6, 4, 1, 2, 2, 8, 7, 4, 2, 7, 5, 3, 8, 6, 2, 1, 7, 0, 4, 1, 3, 2, 8, 6
- (1) 4  
(2) 5  
(3) 6  
(4) 7

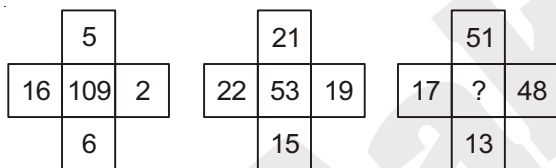
**Answer (4)**

**Sol.**  $\boxed{6, 4}, 1, 2, 2, 8, 7, \boxed{4, 2}, \boxed{7, 5}, \boxed{3}, \boxed{8, 6}, 2, 1$   
 $7, 0, 4, \boxed{1, 3}, 2, \boxed{8, 6}$

28. A — Medicine    B — Diagnosis    C — Doctor  
D — Fever    E — Recovery
- (1) D C A B E  
(2) D E C A B  
(3) D C B A E  
(4) C D B A E

**Answer (3)**

29. Find the missing number (?) from the given alternatives, when same rule is applied in all three situations.



- (1) 7  
(2) 25  
(3) 49  
(4) 129

**Answer (2)**

**Sol.**

$$(16 - 6)^2 + (5 - 2)^2 = 100 + 9 = 109$$

$$(22 - 15)^2 + 2^2 = 49 + 4 = 53$$

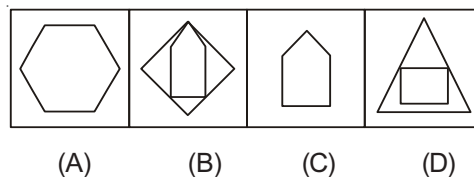
$$(17 - 13)^2 + (51 - 48)^2 = 4^2 + 3^2 = 25$$

30. As 'part' is related to 'whole', in the same way an 'Arc' is related to which of the following?
- (1) Rectangle  
(2) Circle  
(3) Triangle  
(4) Square

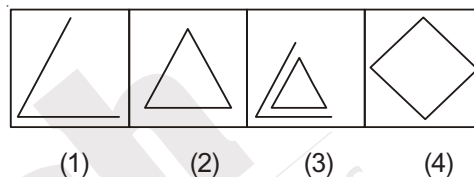
**Answer (2)**

**Direction :** In questions 31 to 34 there are two sets of figures. One set contains problem-figures while the other has answer-figures. There is a sequence according to which the problem-figures are arranged. You have to select an answer-figure which can be added in sequence with the problem-figures. Choose the correct figure.

31. Problem figures

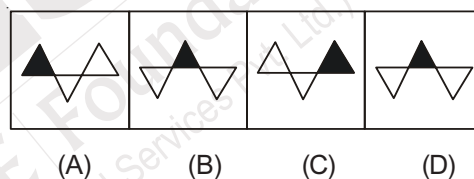


Answer figures

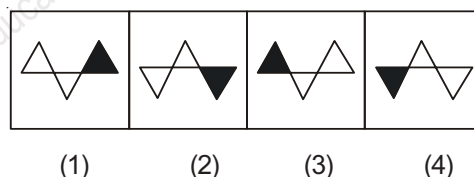


**Answer (4)**

32. Problem figures

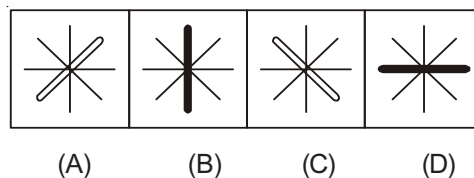


Answer figures

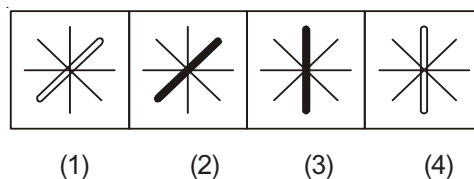


**Answer (3)**

33. Problem figures

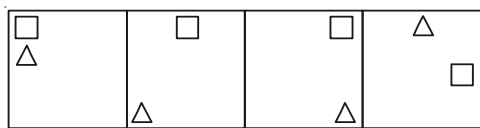


Answer figures



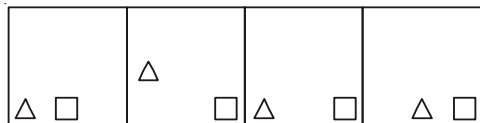
**Answer (1)**

34. Problem figures



(A) (B) (C) (D)


Answer figures



(1) (2) (3) (4)

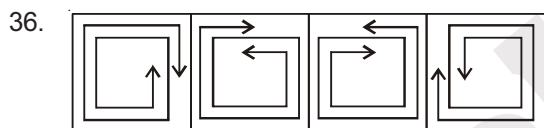
Answer (4)

**Direction :** In question 35 to 38 there are four figures given in each. One of these does not correlate with the rest of the figures. Select that odd figure.



(1) (2) (3) (4)

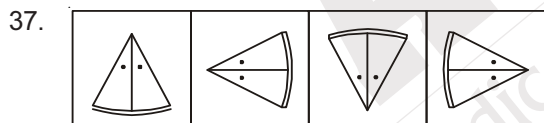
Answer (4)



(1) (2) (3) (4)

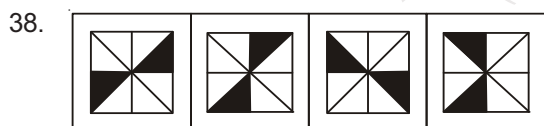
Answer (3)

**Sol.** All are clockwise but (3) is anticlockwise



(1) (2) (3) (4)

Answer (1)



(1) (2) (3) (4)

Answer (4)

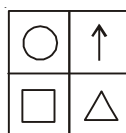
**Direction :** In questions 39 and 40, find the correct mirror image of the given figure, when mirror is placed on right side of the figure.

39. STOP

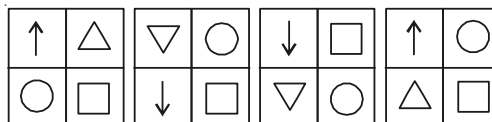
- (1) 2T0P (2) 90T2  
(3) 9T0P (4) P0T2

Answer (2)

40. Question image



Answer image



(1) (2) (3) (4)

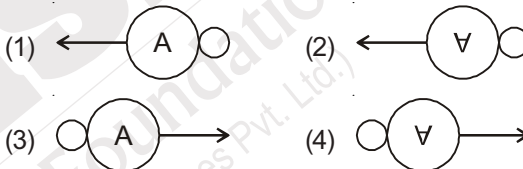
Answer (4)

**Direction :** In questions 41 and 42 select the correct water image of the given figure.

41. Question figure



Answer figures



Answer (2)

42. Question figure

X 7 W 4

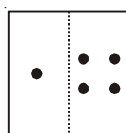
Answer figures

- (1) X 2 M 4 (2) X 7 M 4  
(3) X 2 W 4 (4) X 2 M 4

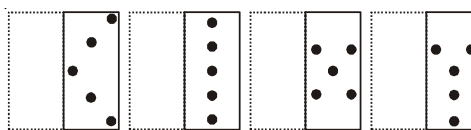
Answer (1)

**Direction :** A square transparent sheet with a pattern is folded along the dotted line. Which of the following answer figures is formed after folding the transparent sheet?

43. Transparent sheet



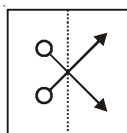
Answer figures



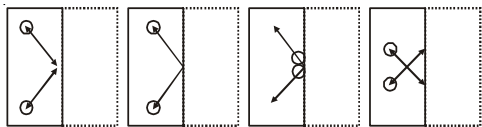
(1) (2) (3) (4)

Answer (3)

44. Transparent sheet



Answer figures



(1) (2) (3) (4)

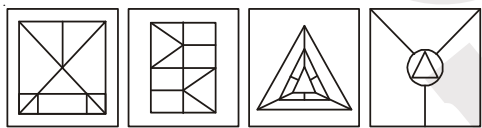
**Answer (2)**

**Direction :** In the following figures there is a question figure, which is embedded in one of the answer-figures. Trace out the correct figure.

45. Question figure



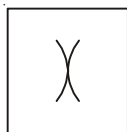
Answer figures



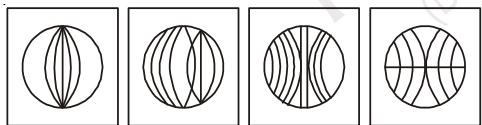
(1) (2) (3) (4)

**Answer (3)**

46. Question figure



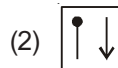
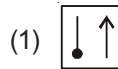
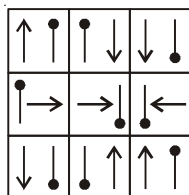
Answer figures



(1) (2) (3) (4)

**Answer (4)**

47. Which of the answer figures completes the given matrix figure?



**Answer (1)**

48. If  $20 * 3 = 180$  and  $4 * 5 = 100$ , then what is the value of  $7 * 7$  ?

- (1) 21
- (2) 49
- (3) 343
- (4) 7

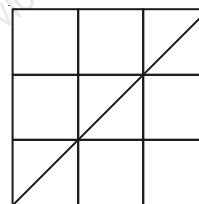
**Answer (3)**

**Sol.**  $20 \times 9 = 180$

$4 \times 25 = 100$

$7 \times 49 = 343$

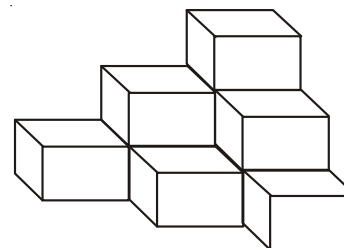
49. Determine the number of squares in the following figure :



- (1) 14
- (2) 9
- (3) 10
- (4) 16

**Answer (1)**

50. How many cubes are laid on a plane as shown in the following figure?



- (1) 14
- (2) 12
- (3) 10
- (4) 8

**Answer (3)**



## PART-II : LANGUAGE TEST

**Direction for Question No.51-55 :** Read the passage and answer the questions based on it.

Of all the trees of southern Asia, the banyan is unique, not only for the manner of its growth, but for the area of shade it provides from the burning sun. Its close relationship with man has evolved over the years to make the banyan a popular meeting place, a focal point worship and a source of practical materials for commerce.

Known as the 'Strangler fig' because of its unusual manner of growth, the banyan is an epiphyte or air plant, that has its birth in the branches of a host tree and lives on airborne moisture and nutrients. Banyan seeds are deposited by bird, bats or monkeys in the rich soil collected in the crevices of host tree branches.

As the banyan grows, it sends aerial roots down the trunk of the supporting tree. In time, the roots that reach the ground choke the host tree by preventing its trunk from enlarging. The two best known species of banyans are : the Indian, one of the world's largest tropical tree; and the Chinese, a smaller with fewer aerial roots.

51. The banyan tree is unique for
- (1) It grows in southern Asia
  - (2) It is a small tree
  - (3) Its growth is unusual and it gives shade for big area
  - (4) Its fruit is very big

**Answer (3)**

**Sol. Hint :** Line number 2 in passage

52. The banyan tree is a focal point of worship for
- (1) Birds
  - (2) Wild animals
  - (3) Nature
  - (4) Man

**Answer (4)**

**Sol. Hint :** Line number 3

53. Owing to its unusual manner of growth, the banyan tree is called
- (1) A place of worship
  - (2) A place of rest
  - (3) A strangler fig
  - (4) A tree of beauty

**Answer (3)**

**Sol. Hint :** 2<sup>nd</sup> paragraph 1<sup>st</sup> line

54. The two species of banyan trees are
- (1) The Indian and the Chinese
  - (2) The shady and the big
  - (3) The aerial and the land
  - (4) The host and the guest

**Answer (1)**

**Sol. Hint :** 3<sup>rd</sup> paragraph last line

55. The aerial roots \_\_\_\_\_ the trunk of the host tree.
- (1) support
  - (2) grow
  - (3) choke
  - (4) enlarge

**Answer (3)**

**Sol. Hint :** 3<sup>rd</sup> paragraph 2<sup>nd</sup> line

**Choose the correct options to fill in the blanks**

56. A doctor \_\_\_\_\_ the patients but God cures all.
- (1) treating
  - (2) treated
  - (3) treats
  - (4) had treated

**Answer (3)**

**Sol. Simple Present (cures → Hint)**

57. While \_\_\_\_\_ basketball Sunil was badly hit.
- (1) play
  - (2) playing
  - (3) played
  - (4) had played

**Answer (2)**

**Sol. Past continuous (Hint → while)**

58. \_\_\_\_\_ slow, this is school area.
- (1) Drive
  - (2) Is driving
  - (3) Drove
  - (4) Driven

**Answer (1)**

**Sol. Simple Present**

59. 'Applaud' means
- (1) remark
  - (2) backbite
  - (3) consent
  - (4) praise

**Answer (4)**



60. Find the odd one out.

- (1) advance                      (2) promote  
 (3) forward                      (4) farther

**Answer (4)**

**Sol.** Farther means much far. The other three means to progress.

61. The new slogan \_\_\_\_\_ by our school teacher last year.

- (1) is given                      (2) is being given  
 (3) was given                      (4) was being given

**Answer (3)**

**Sol.** Passive voice (Past simple)

**Hint :** Last Year

62. The notorious band \_\_\_\_\_ today.

- (1) has been arrested  
 (2) had been arrested  
 (3) was been arrested  
 (4) will have arrested

**Answer (1)**

**Sol.** Passive voice : Present Perfect

63. Let the picture \_\_\_\_\_

- (1) is hung                      (2) being hung  
 (3) be hung                      (4) been hung

**Answer (3)**

**Sol.** If the sentence starts with 'let', it will have helping verb 'be' +  $v_3$

64. Those cars \_\_\_\_\_ by robots years ago.

- (1) are being built              (2) are built  
 (3) were built                      (4) had built

**Answer (3)**

**Sol.** Passive voice : Simple Past

65. The sages said, "You will be winner".

The sages said \_\_\_\_\_

- (1) if he would be winner  
 (2) that he would be winner  
 (3) that he will be winner  
 (4) that they would be winner

**Answer (2)**

**Sol.** Will → would (Indirect sp.)

66. Sarla said to me, "I need your help today".

Sarla told me \_\_\_\_\_

- (1) that she needed my help that day  
 (2) that i needed her help that day  
 (3) that she needed your help that day  
 (4) that you needed my help now

**Answer (1)**

**Sol.** Need → needed; Today → that day (Indirect sp.)

67. The policeman said to my mother, "May I help you?"

The policeman asked my mother \_\_\_\_\_

- (1) if she need his help  
 (2) may he help you  
 (3) that he might help her  
 (4) if he might help her

**Answer (4)**

**Sol.** May → Might (Indirect). Question → If

68. The landlord commanded, "You \_\_\_\_\_ not enter my house again."

- (1) can  
 (2) shall  
 (3) may  
 (4) could

**Answer (2)**

**Sol.** Shall is used for command or Promise

69. One \_\_\_\_\_ be punctual.

- (1) can                              (2) may  
 (3) should                        (4) will

**Answer (3)**

**Sol.** Advice

70. The synonym of 'benevolent' is

- (1) honest                        (2) holy  
 (3) generous                      (4) cruel

**Answer (3)**

71. The antonym of 'realistic' is

- (1) imaginary                      (2) true  
 (3) reliable                        (4) authentic

**Answer (1)**

72. Gold and silver \_\_\_\_\_ precious metals.

- (1) is (2) are  
(3) was (4) am

**Answer (2)**

**Sol.** Two subjects joined with and verb → Plural

73. The wages of sin \_\_\_\_\_ death.

- (1) is (2) are  
(3) were (4) am

**Answer (1)**

**Sol.** wages → uncountable Noun

74. A rupee has \_\_\_\_\_ hundred paise.

- (1) the (2) a  
(3) an (4) any

**Answer (2)**

**Sol.** 'Hundred paise' is counted as a unit

75. Please give me \_\_\_\_\_ more tea.

- (1) few (2) many  
(3) some (4) any

**Answer (3)**

**Sol.** some → uncountable tea

76. "How \_\_\_\_\_ money do you need?" she asked the boy.

- (1) many (2) some  
(3) any (4) much

**Answer (4)**

**Sol.** much → uncountable Noun (money)

77. The correctly spelt word is

- (1) comepasion (2) compassion  
(3) comeption (4) compasion

**Answer (2)**

78. The correctly spelt word is

- (1) dependance (2) deppendance  
(3) dependence (4) dependance

**Answer (3)**

79. The Piper stepped \_\_\_\_\_ the street.

- (1) on (2) in  
(3) into (4) for

**Answer (3)**

**Sol.** Movement → into

80. The sailors sailed \_\_\_\_\_ the river

- (1) on (2) down  
(3) below (4) above

**Answer (2)**

**Sol.** street or river or stream → down/up

81. The mail train is due \_\_\_\_\_ 3 p.m.

- (1) on (2) of  
(3) by (4) in

**Answer (3)**

**Sol.** fixed preposition

82. The tiger is now confined \_\_\_\_\_ national parks.

- (1) to (2) off  
(3) at (4) of

**Answer (1)**

**Sol.** fixed preposition

83. He learnt to play physical games, \_\_\_\_\_ ?

- (1) did he  
(2) didn't you  
(3) doesn't he  
(4) didn't he

**Answer (4)**

**Sol.** simple past (Affirmative form)

84. I ain't interested in video games, \_\_\_\_\_

- (1) is you (2) aren't you  
(3) am I (4) are you

**Answer (3)**

**Sol.** am not (negative form)

85. Be just \_\_\_\_\_ fear not.

- (1) or (2) but  
(3) and (4) if

**Answer (3)**

**Sol.** Similar clauses

86. Catch me \_\_\_\_\_ you can.

- (1) or (2) but  
(3) and (4) if

**Answer (4)**

**Sol.** Condition in second clause

87. Nalini's grandfather dies \_\_\_\_\_ she was born.

- (1) but (2) before  
(3) and (4) so

**Answer (2)**

**Sol.** First action happened before second

88. The police caught the thief \_\_\_\_\_ looted travellers in the passenger trains.

- (1) which (2) whom  
(3) who (4) whose

**Answer (3)**

**Sol.** Who for person as subject

89. The king was happy \_\_\_\_\_ people gave him gifts.

- (1) where (2) when  
(3) whom (4) who

**Answer (2)**

90. She broke the glass \_\_\_\_\_ was very expensive.

- (1) what (2) how  
(3) who (4) that

**Answer (4)**

**Sol.** That for thing

Recorder the words to make sentences :

91. is / my / democracy / ideal / political

- (a) (b) (c) (d) (e)  
(1) (a) (c) (b) (e) (d) (2) (b) (e) (d) (a) (c)  
(3) (d) (b) (e) (a) (c) (4) (a) (d) (e) (c) (b)

**Answer (2)**

**Sol.** My political ideal is democracy

92. Ideal / were / as an / couple / my parents /regarded

- (a) (b) (c) (d) (e) (f)  
(1) (e) (b) (f) (c) (a) (d) (2) (c) (a) (d) (f) (e) (b)  
(3) (b) (d) (a)(e) (f) (c) (4) (e) (d) (f) (c) (a) (b)

**Answer (1)**

**Sol.** My parents were regarded as an ideal couple

93. The model / we / theoutlook / of / changed.

- (a) (b) (c) (d) (e)  
(1) (b) (a) (e) (d) (c)  
(2) (d) (a) (e) (c) (b)  
(3) (b) (e) (c) (d) (a)  
(4) (a) (e) (c) (b) (d)

**Answer (3)**

**Sol.** We changed the outlook of the model

94. The correct suffix that goes with the word 'charger' is

- (1) - ment (2) - ity  
(3) - ish (4) - able

**Answer (4)**

**Sol.** Chargeable

95. The correct prefix that goes with the word 'legal' is

- (1) un- (2) in-  
(3) it- (4) im-

**Answer (Bonus)**

**Sol.** Illegal

For Question No. 96 and 97 choose the correct meaning of the given phrasal verbs

96. 'Call for'

- (1) shout (2) allow  
(3) require (4) give

**Answer (3)**

97. The company 'turned down' his application.

- (1) rejected (2) put on table  
(3) accepted (4) entered

**Answer (1)**

98. The correct example of homophones is

- (1) care - cure (2) liar - layer  
(3) except - accept (4) gold - glad

**Answer (3)**

**Sol.** Except and accept sounds the same but means different

99. A person who seeks to promote the welfare of others is

- (1) atheist (2) philanthropist  
(3) fatalist (4) pessimist

**Answer (2)**

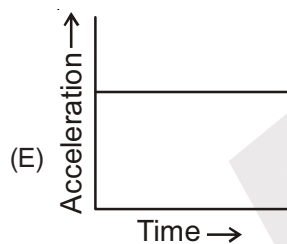
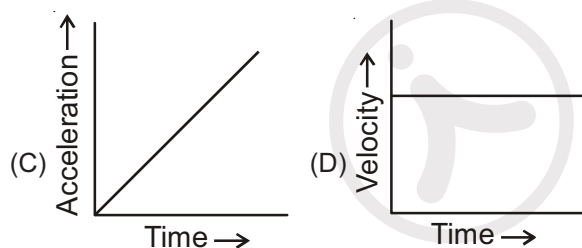
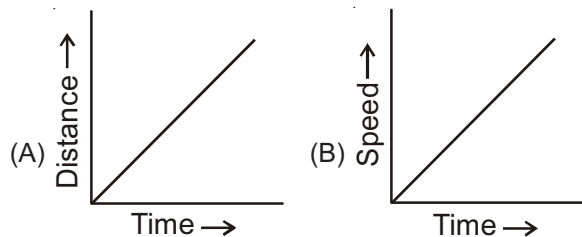
100. A poem consisting of fourteen iambic pentameter lines is

- (1) lyric (2) ballad  
(3) ode (4) sonnet

**Answer (4)**

**PART-III : SCHOLASTIC APTITUDE TEST (SAT)**

101. Consider the following five graphs (note the axis carefully). Which of the following represents motion at constant speed?



- (1) D only                      (2) D and E  
(3) A, B and C                (4) A and D

**Answer (4)**

102. A bullet of mass 50 gm is horizontally fired with a velocity  $100 \text{ ms}^{-1}$  from a gun of mass 10 kg. What will be the recoil velocity of the gun?

- (1)  $100 \text{ ms}^{-1}$                 (2)  $500 \text{ ms}^{-1}$   
(3)  $0.5 \text{ ms}^{-1}$                 (4) zero

**Answer (3)**

**Sol.** By law of conservation of momentum,

$$m_1 v_1 + m_2 v_2 = m_1 v_1 + m_2 v_2$$

$$0 + 0 = (50 \times 10^{-3} \times 10^2) + (10 + v)$$

$$-10v = 5$$

$$v = \frac{-1}{2} \text{ m/s}$$

103. A ball is shot vertically upward with a given initial velocity. It reaches a maximum height of 100 m. If on a second shot, the initial velocity is doubled then the ball will reach a maximum height of

- (1) 70.7 m                      (2) 141.4 m  
(3) 200 m                      (4) 400 m

**Answer (4)**

**Sol.**  $H \propto (u)^2$

$$\frac{H}{H'} = \left(\frac{u}{2u}\right)^2$$

$$\Rightarrow \frac{H}{H'} = \frac{1}{4}$$

$$\Rightarrow \frac{100}{H'} = \frac{1}{4}$$

$$H' = 400 \text{ m}$$

104. Let  $M$  denotes the mass of earth and let  $R$  denotes its radius. The ratio  $g/G$  at earth's surface is

- (1)  $R^2/M$                       (2)  $M/R^2$   
(3)  $M/R$                       (4)  $R/M$

**Answer (2)**

**Sol.**  $\frac{g}{G} = \frac{\left(\frac{GM}{R^2}\right)}{\left(\frac{G}{1}\right)} = \frac{M}{R^2}$

105. The unit 'hertz' is same as

- (1) second                      (2)  $\text{second}^{-1}$   
(3) metre                      (4)  $\text{metre}^{-1}$

**Answer (2)**

**Sol.** SI unit of frequency is hertz or  $(\text{second})^{-1}$

106. A sound wave has a frequency of 10 kHz and wavelength 3 mm. How much time will it take to travel 3 metre?

- (1) 0.1 sec                      (2) 1 sec  
(3) 10 sec                      (4) 0.01 sec

**Answer (1)**

**Sol.**  $v = 10 \times 10^3 \text{ Hz}$  ;  $\lambda = 3 \times 10^{-3} \text{ m}$

$$v = v\lambda$$

$$v = 3 \times 10^{-3} \times 10 \times 10^3$$

$$v = 30 \text{ m/s}$$

$$\text{Time} = \frac{\text{Distance}}{\text{Speed}} = \frac{3\text{m}}{30\text{m/s}}$$

$$= \frac{1}{10} \text{ sec} = 0.1\text{sec}$$

107. The size of image formed by a concave mirror is same as the size of object. The position of the object will be

- (1) at F
- (2) between F and C
- (3) at C
- (4) between C and infinity

**Answer (3)**

108. A convex lens has focal length 30 cm. If an object is placed at a distance of 15 cm from it then the magnification produced by the lens is

- (1) 6.66
- (2) 0.5
- (3) 1
- (4) 2

**Answer (4)**

**Sol.**  $f = 30 \text{ cm}$ ,  $u = -15 \text{ cm}$ ,  $m = ?$

**By lens formula**

$$\Rightarrow \frac{1}{v} - \frac{1}{u} = \frac{1}{f}$$

$$\Rightarrow \frac{1}{v} = \frac{1}{f} + \frac{1}{u}$$

$$\Rightarrow \frac{1}{v} = \frac{1}{(30)} + \frac{1}{(-15)}$$

$$\Rightarrow v = 30 \text{ cm}$$

$$m = \frac{v}{u} = \frac{-30}{-15} = 2$$

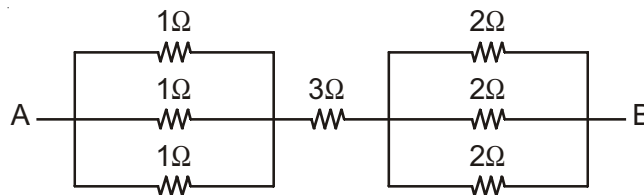
109. The electrical resistivity of a conducting wire is  $K$ . If its length and area of cross-section are doubled then the new resistivity of the wire will be

- (1)  $K$
- (2)  $2K$
- (3)  $K/2$
- (4)  $K/4$

**Answer (1)**

**Sol.** Resistivity is independent of length and area of cross-section.

110. What is the equivalent resistance of the given circuit between points A and B?



- (1)  $10 \Omega$
- (2)  $4 \Omega$
- (3)  $\frac{14}{3} \Omega$
- (4)  $\frac{17}{6} \Omega$

**Answer (2)**

**Sol.**  $R_{eq} = \frac{1}{\frac{1}{3} + \frac{1}{3} + \frac{1}{3}} + 3 + \frac{2}{\frac{1}{2} + \frac{1}{2} + \frac{1}{2}} = 4 \Omega$

111. 4 bulbs rated 100 W each, operate for 6 hours per day. What is the cost of the energy consumed in 30 days at the rate of Rs. 5 / kWh?

- (1) Rs. 360
- (2) Rs. 90
- (3) Rs. 120
- (4) Rs. 400

**Answer (1)**

**Sol.**

Number of Devices	Device	Power (kW)	Time (hour)	Energy (kW hr)
4	Bulb	$\frac{100}{1000} \times 4$	6	$\frac{12}{5}$ kWhr

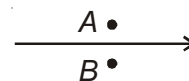
$$\text{Energy in 1 day} \rightarrow \frac{12}{5} \text{ kWhr}$$

$$\text{Energy in 30 day} \rightarrow \frac{12}{5} \times 30 = 72 \text{ kWhr}$$

$$\text{As } 1 \text{ kW hr} = \text{Rs. } 5/-$$

$$72 \text{ kW hr} = \text{Rs. } 360/-$$

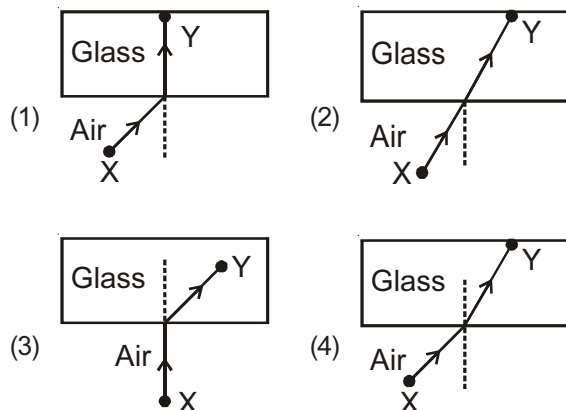
112. An electric current is passed through a straight wire. Magnetic compasses are placed at the points A and B. True statement is



- (1) their needles will not deflect
- (2) only one of the needles will deflect
- (3) both the needles will deflect in the same direction
- (4) the needles will deflect in the opposite direction

**Answer (4)**

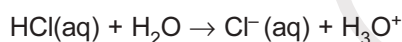
113. Which diagram below illustrates the path of a light ray as it travels from a given point X in air to another given point Y in glass?



**Answer (4)**

**Sol.** Light travelling from air to glass bends towards normal.

114. Conjugate base of HCl in the following reaction is



- (1)  $\text{H}_3\text{O}^{\oplus}$                       (2)  $\text{H}_2\text{O}$   
(3)  $\text{Cl}^{\ominus}$                         (4)  $\text{HCl}$

**Answer (3)**

**Sol.**  $\text{HCl(aq)} + \text{H}_2\text{O} \rightarrow \text{Cl}^{\ominus}(\text{aq}) + \text{H}_3\text{O}^{\oplus}$

According to Bronsted-Lowry theory, acid is proton ( $\text{H}^+$ ) donor and base is proton acceptor.

$\text{Cl}^{\ominus}$  is the conjugate base of HCl.

$\therefore$  HCl and  $\text{Cl}^{\ominus}$  is a conjugate acid base pair.

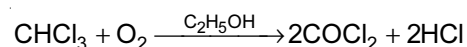
115. The chemical formula of Plaster of Paris is

- (1)  $\text{CaSO}_4$                       (2)  $\text{CaSO}_4 \cdot 2\text{H}_2\text{O}$   
(3)  $\text{CaSO}_4 \cdot \frac{1}{2}\text{H}_2\text{O}$             (4)  $\text{CaSO}_4 \cdot \text{H}_2\text{O}$

**Answer (3)**

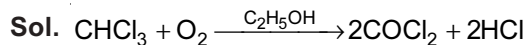
**Sol.** Formula of Plaster of Paris is  $\text{CaSO}_4 \cdot \frac{1}{2}\text{H}_2\text{O}$   
calcium sulphate hemihydrate.

116. Which type of catalyst is ethanol in the following reaction?



- (1) Positive catalyst  
(2) Negative catalyst  
(3) Bio-catalyst  
(4) Autocatalyst

**Answer (2)**



In this reaction ethanol is a negative catalyst as it reduces the rate of reaction.

117. Metalloid among the following is

- (1) Lithium                      (2) Sulphur  
(3) Sodium                      (4) Silicon

**Answer (4)**

**Sol.** Silicon is a metalloid.

118. The IUPAC name of  $\begin{matrix} \text{CH}_3 \\ \text{CH}_3 \end{matrix} > \text{C} = \text{CH}_2$  is

- (1) 1, 1-dimethyl-2-ethene  
(2) 2-methyl-1-propene  
(3) 2, 2-dimethyl ethene  
(4) 2-methyl prop-2-ene

**Answer (2)**

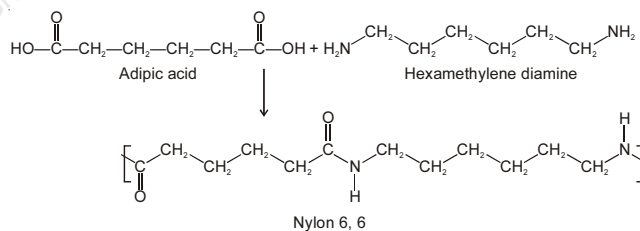
**Sol.**  $\begin{matrix} \text{③} \\ \text{CH}_3 \\ \text{CH}_3 \end{matrix} > \begin{matrix} \text{②} \\ \text{C} \\ \text{①} \end{matrix} = \text{CH}_2$   
2-methyl-1-propene

119. The polymer formed by condensation of adipic acid and hexamethylene diamine is

- (1) isoprene                      (2) rayon  
(3) terylene                      (4) nylon-6, 6

**Answer (4)**

**Sol.**



This is a polymerisation reaction.

120. The method for separation of mixture of common salt and ammonium chloride is

- (1) fractional distillation  
(2) sublimation  
(3) chromatography  
(4) crystallization

**Answer (2)**

**Sol.** Sodium chloride and ammonium chloride can be separated by sublimation as ammonium chloride undergo sublimation.

121. Number of molecules present in 14 gm of  $N_2$  molecule is

- (1)  $6.022 \times 10^{23}$                       (2)  $3.011 \times 10^{23}$   
 (3)  $1.51 \times 10^{23}$                       (4)  $6.022 \times 10^{22}$

**Answer (2)**

**Sol.** No. of molecules =  $\frac{\text{Given mass}}{\text{Molar mass}} \times 6.02 \times 10^{23}$

$$= \frac{14}{28} \times 6.02 \times 10^{23}$$

$$= 3.01 \times 10^{23} \text{ molecules}$$

122. Which of the following element has an electronic configuration 2, 8, 6?

- (1) Sulphur                              (2) Oxygen  
 (3) Phosphorus                        (4) Chlorine

**Answer (1)**

**Sol.** Atomic number of sulphur = 16  
 Electronic configuration = 2, 8, 6

123. Which of the following element shows variable valency?

- (1) Na                                      (2) Mg  
 (3) Fe                                      (4) Zn

**Answer (3)**

**Sol.** Iron shows variable valency of +2 and +3.

124. Formula of aluminium carbonate is

- (1)  $Al_2(CO_3)_3$                       (2)  $Al_2CO_3$   
 (3)  $Al_2HCO_3$                         (4)  $AlCO_3$

**Answer (1)**

**Sol.** Aluminium carbonate

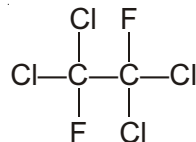


125. Formula of Freon-112 is

- (1)  $C_2F_2Cl_4$   
 (2)  $CF_2Cl_2$   
 (3)  $CFCI_3$   
 (4)  $CCl_3F$

**Answer (1)**

**Sol.**



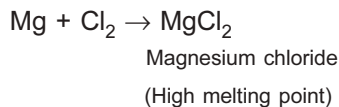
1, 1, 2, 2-Tetrachloro-1, 2-difluoroethane (CFC 112)

126. The element X reacting with chlorine forms a water soluble compound having high melting point. Element X is

- (1) magnesium                        (2) argon  
 (3) carbon                              (4) neon

**Answer (1)**

**Sol.** Magnesium reacts with chlorine to form water soluble compound.



127. Which tissue is found in fibrous covering of coconut?

- (1) Parenchyma                        (2) Collenchyma  
 (3) Sclerenchyma                    (4) Meristematic tissue

**Answer (3)**

**Sol.** Sclerenchyma is found in fibrous covering of coconut.

128. Nucleus of the cell was discovered by

- (1) Robert Hooke                      (2) Leeuwenhoek  
 (3) Robert Brown                      (4) Virchow

**Answer (3)**

**Sol.** Nucleus of cell was discovered by Robert Brown.

129. Which of the following is a plant hormone?

- (1) Insulin                                (2) Thyroxine  
 (3) Cytokinin                            (4) Oestrogen

**Answer (3)**

**Sol.** Cytokinin is the plant hormone.

130. Plant group more sensitive to the levels of sulphur dioxide in air is

- (1) Thallophyta                        (2) Lichen  
 (3) Pteridophyta                        (4) Gymnosperm

**Answer (2)**

**Sol.** Lichen are sensitive to the level of sulphur dioxide in air.

131. Examples of perennial, evergreen and woody plants are

- (1) Funaria, Marchantia  
 (2) Marsilea, Horse-tail  
 (3) Cycas, Pinus  
 (4) Ulothrix, Spirogyra

**Answer (3)**

**Sol.** Gymnosperms (*Cycas*, *Pinus*) are the perennial, evergreen and woody plants.



132. Turgidity of cell is maintained by

- (1) Vacuole (2) Lysosome  
(3) Plastid (4) Golgi body

**Answer (1)**

**Sol.** Turgidity of cell is maintained by vacuole.

133. The substance not essential for photosynthesis is

- (1) Sunlight (2) Chlorophyll  
(3) Nitrogen (4) Carbon dioxide

**Answer (3)**

**Sol.** Nitrogen is not essential for photosynthesis.

134. The nature of nerve impulse is

- (1) Chemical (2) Magnetic  
(3) Electrochemical (4) Electromagnetic

**Answer (3)**

**Sol.** The nature of nerve impulse is electrochemical.

135. The example of uricotelic animals is

- (1) Fishes (2) Reptiles  
(3) Amphibians (4) Mammals

**Answer (2)**

**Sol.** Reptiles are the animals which excrete uric acid. Hence known as uricotelic animals.

136. According to Mendel in monohybrid cross the genotypic ratio of  $F_2$  generation is

- (1) 3 : 1 (2) 9 : 3 : 3 : 1  
(3) 1 : 1 (4) 1 : 2 : 1

**Answer (4)**

**Sol.** The genotypic ratio of  $F_2$  generation for monohybrid cross is 1 : 2 : 1.

137. Example of connective tissue is

- (1) Cartilage  
(2) Skeletal muscles  
(3) Skin of animals  
(4) Nerve cells

**Answer (1)**

**Sol.** Cartilage are the solid connective tissue.

138. The example of egg laying mammal is

- (1) Bat  
(2) Kangaroo  
(3) Pigeon  
(4) Echidna

**Answer (4)**

**Sol.** The egg laying mammal is *Echidna*.

139. Non-communicable disease is

- (1) Cancer (2) AIDS  
(3) Amoebiasis (4) Jaundice

**Answer (1)**

**Sol.** The non-communicable disease is cancer.

140. Animals of which phylum are pseudocoelomate?

- (1) Porifera (2) Platyhelminthes  
(3) Aschelminthes (4) Mollusca

**Answer (3)**

**Sol.** Aschelminthes are pseudocoelomate.

141. If  $\frac{3+2\sqrt{3}}{3-\sqrt{3}} = a + \sqrt{3}b$ , then the value of  $\sqrt{a+b}$  where  $a$  and  $b$  are rational number is

- (1) 5 (2) 8  
(3) 2 (4) 16

**Answer (3)**

**Sol.** 
$$\frac{3+2\sqrt{3}}{3-\sqrt{3}} \times \frac{3+\sqrt{3}}{3+\sqrt{3}}$$

$$= \frac{(3+2\sqrt{3})(3+\sqrt{3})}{9-3}$$

$$= \frac{9+6\sqrt{3}+3\sqrt{3}+6}{6}$$

$$= \frac{15+9\sqrt{3}}{6}$$

$$= \frac{15}{6} + \frac{9}{6}$$

$$= \frac{5}{2} + \frac{3}{2}$$

$$a = \frac{5}{2}, b = \frac{3}{2}$$

$$\sqrt{a+b} = \sqrt{\frac{5}{2} + \frac{3}{2}}$$

$$= \sqrt{\frac{8}{2}} = \sqrt{4} = 2$$

142. For which positive values of  $k$  and  $p$ , equations  $2x^2 + px + 8 = 0$  and  $p(x^2 + x) + k = 0$  have equal roots?

- (1)  $k = 1, p = 4$  (2)  $k = 2, p = 8$   
(3)  $k = 4, p = 8$  (4)  $k = 2, p = 4$

**Answer (2)**

**Sol.**  $2x^2 + px + 8 = 0$

$$D = 0$$

$$p^2 - 4 \times 2 \times 8 = 0$$

$$p^2 = 8 \times 8$$

$$\therefore p = 8$$

$$p(x^2 + x) + k = 0$$

$$8(x^2 + x) + k = 0$$

$$\therefore 8x^2 + 8x + k = 0$$

$$D = 0$$

$$\Rightarrow 64 - 4 \times 8 \times k = 0$$

$$\therefore k = \frac{8 \times 8}{4 \times 8} = 2$$

143. If  $\alpha, \beta$  are zeros of polynomial  $x^2 - p(x + 1) - k$  such that  $(\alpha + 1)(\beta + 1) = 6$ , then value of  $k$  is

(1) 5

(2) -1

(3) -3

(4) -5

**Answer (4)**

**Sol.**  $x^2 - p(x + 1) - k = 0$

$$x^2 - px - p - k = 0$$

$$x^2 - px - (p + k) = 0$$

$$\alpha + \beta = p$$

$$\alpha\beta = -(p + k)$$

$$(\alpha + 1)(\beta + 1) = 6$$

$$\alpha\beta + (\beta + \alpha) + 1 = 6$$

$$-(p + k) + p + 1 = 6$$

$$-k + 1 = 6$$

$$\therefore k = -5$$

144. Which is unit digit of  $6^{18} - 5^{10}$ ?

(1) 5

(2) 8

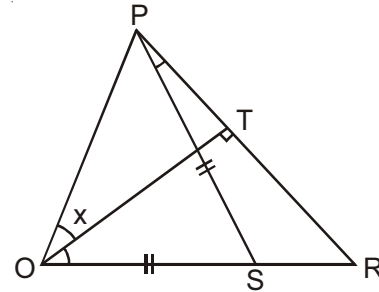
(3) 1

(4) 9

**Answer (3)**

**Sol.** 
$$\begin{array}{r} 6^{18} - 5^{10} \\ \downarrow \quad \downarrow \\ 6 - 5 = \textcircled{1} \end{array}$$

145. In the following figure  $QT \perp PR$  and  $QS = PS$ . If  $\angle TQR = 40^\circ$  and  $\angle RPS = 20^\circ$  then value of  $x$  is



(1)  $80^\circ$

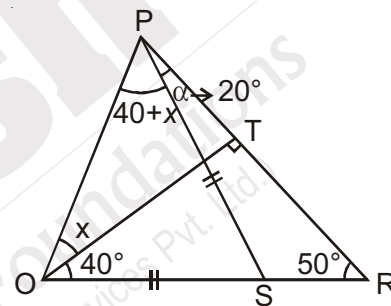
(2)  $25^\circ$

(3)  $15^\circ$

(4)  $35^\circ$

**Answer (3)**

**Sol.**



$$40 + x + \alpha + x = 90^\circ, \text{ (where } \alpha = 20^\circ\text{)}$$

$$60 + 2x = 90^\circ$$

$$\therefore x = 15^\circ$$

146. Which term of A.P.  $20, 19\frac{1}{4}, 18\frac{1}{2}, \dots$  is first negative term?

(1)  $18^{\text{th}}$

(2)  $15^{\text{th}}$

(3)  $28^{\text{th}}$

(4)  $27^{\text{th}}$

**Answer (3)**

**Sol.**  $20, 19\frac{1}{4}, 18\frac{1}{2}, \dots$

$$T_n = 20 + (n - 1)\left(-\frac{3}{4}\right) < 0$$

$$= 20 + \frac{3}{4}(1 - n) < 0$$

$$\text{or } 80 + 3 - 3n < 0$$

$$\therefore n > \frac{83}{3}$$

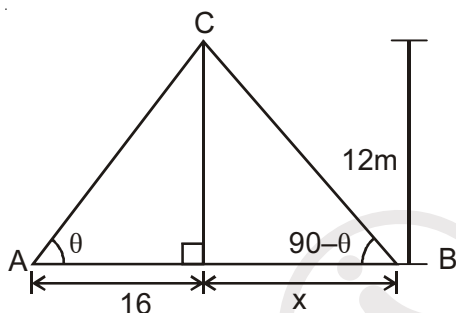
$$\therefore n = 28^{\text{s}}$$

147. The angles of elevation of the top of a 12 m high tower from two points in opposite directions with it are complementary. If distance of one point from its base is 16 m, then distance of second point from tower's base is

- (1) 24 m                      (2) 9 m  
(3) 12 m                      (4) 18 m

**Answer (2)**

**Sol.**



$$\tan \theta = \frac{12}{16}$$

$$\cot \theta = \frac{12}{x}$$

$$x = 12 \tan \theta$$

$$= 12 \times \frac{12}{16} = 9$$

148. If  $m = \frac{\cos A}{\cos B}$  and  $n = \frac{\cos A}{\sin B}$ , then  $(m^2 + n^2)\cos^2 B$  is equal to

- (1)  $m^2$                       (2)  $n^2$   
(3)  $m^2 + n^2$               (4)  $m + n$

**Answer (2)**

**Sol.**  $m = \frac{\cos A}{\cos B}$  ;  $n = \frac{\cos A}{\sin B}$

$$\begin{aligned} m^2 + n^2 &= \left( \frac{\cos^2 A}{\cos^2 B} + \frac{\cos^2 A}{\sin^2 B} \right) \cos^2 B \\ &= \cos^2 A \left[ \frac{1}{\cos^2 B \sin^2 B} \right] \cos^2 B \\ &= \frac{\cos^2 A}{\sin^2 B} = n^2 \end{aligned}$$

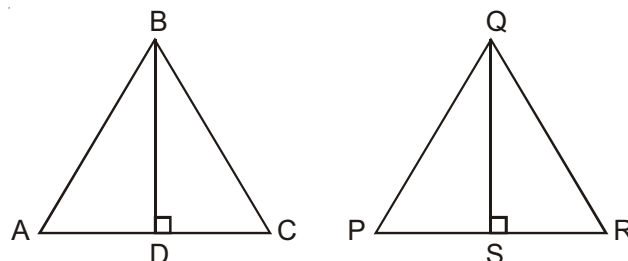
149. If ratio of heights of two similar triangles is 4 : 9, then ratio between their areas is

- (1) 2 : 3                      (2) 3 : 2  
(3) 81 : 16                      (4) 16 : 81

**Answer (4)**

**Sol.**  $\Delta ABC \sim \Delta PQR$

$$\begin{aligned} \frac{\text{ar}(ABC)}{\text{ar}(PQR)} &= \left( \frac{BD}{QS} \right)^2 \\ &= \left( \frac{4}{9} \right)^2 = \frac{16}{81} \end{aligned}$$



150. In a circle of 10 cm radius, two chords  $AB = AC = 12$  cm, then the length of the chord  $BC$  is

- (1) 12 cm                      (2) 9.6 cm  
(3) 19.2 cm                      (4) 7.2 cm

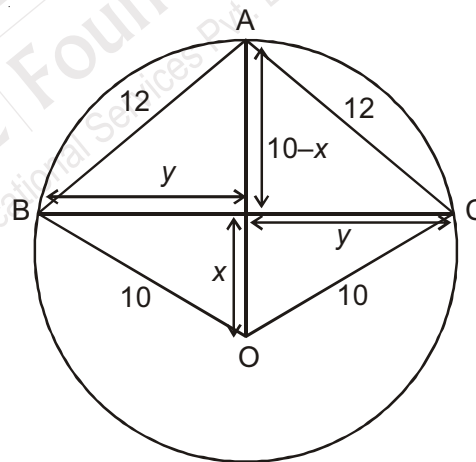
**Answer (3)**

**Sol.**  $(10 - x)^2 + y^2 = 12^2$  ... (1)

$x^2 + y^2 = 10^2$  ... (2)

$x = 2.8$  cm ;  $y = 9.6$  cm

$BC = 2y = 19.2$  cm



151. If mean of ten consecutive odd numbers is 120, then the mean of first five odd numbers among them is

- (1) 113                      (2) 115  
(3) 114                      (4) 116

**Answer (2)**

**Sol.**  $n+1, n+3, n+5, \dots \rightarrow 10$  consecutive odd number.

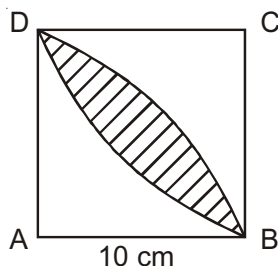
$$120 = \frac{10n + 100}{10} \Rightarrow 120 = n + 10$$

$$n = 110$$

$$= \frac{(n+1) + (n+3) + (n+5) + (n+7) + (n+9)}{5}$$

$$= \frac{5n + 25}{5} = n + 5 = 115$$

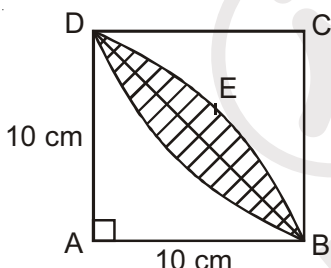
152. Find the area of shaded region, where side of square  $ABCD$  is 10 cm and two arcs drawn from two opposite vertices of the square.



- (1)  $\frac{200}{7}$  sq. unit                      (2)  $\frac{400}{7}$  sq. unit  
(3)  $\frac{600}{7}$  sq. unit                      (4)  $\frac{100}{7}$  sq. unit

**Answer (2)**

**Sol.**



$AD = AB = r$  (say)

Area of shaded portion

$= 2 \times \text{ar}(\text{segment DBED})$

$$= 2 \times \frac{AB^2}{2} \left[ \frac{\pi \times \theta}{180} - \sin \theta \right]$$

$$= 2 \times \frac{10 \times 10}{2} \left[ \frac{\pi \times 90}{180} - \sin 90^\circ \right]$$

$$= 100 \left[ \frac{\pi}{2} - 1 \right]$$

$$= 100 \left[ \frac{22}{14} - 1 \right]$$

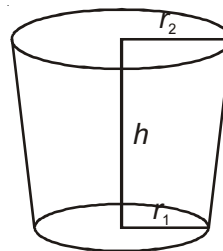
$$= 100 \left[ \frac{11-7}{7} \right] = \frac{400}{7} \text{ cm}^2$$

153. Find the capacity of a glass which is in the shape of frustum of height 14 cm and diameters of both circular ends are 4 cm and 2 cm.

- (1)  $\frac{308}{3}$  cm<sup>3</sup>                      (2)  $\frac{298}{21}$  cm<sup>3</sup>  
(3) 112 cm<sup>2</sup>                      (4)  $\frac{298}{21}$  cm<sup>2</sup>

**Answer (1)**

**Sol.**  $r_1 = 1$  cm;  $r_2 = 2$  cm,  $h = 14$  cm



$\therefore$  Capacity = Volume

$$= \frac{\pi h}{3} [r_1^2 + r_2^2 + r_1 r_2]$$

$$= \frac{22}{7} \times \frac{14}{3} [1 + 4 + 1 \times 2]$$

$$= \frac{44}{3} [7] = \frac{308}{3} \text{ cm}^2$$

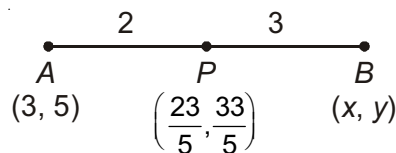
154. If a point  $P\left(\frac{23}{5}, \frac{33}{5}\right)$ , divides line  $AB$  joining two

points  $A(3, 5)$  and  $B(x, y)$  is internally in ratio of 2 : 3, then the values of  $x$  and  $y$  will be

- (1)  $x = 4, y = 7$   
(2)  $x = 5, y = 9$   
(3)  $x = 7, y = 9$   
(4)  $x = 7, y = 8$

**Answer (3)**

**Sol.**



$$\frac{23}{5} = \frac{3 \times 3 + 2 \times x}{5}$$

or  $23 - 9 = 2x$

$$x = \frac{14}{2} = 7$$

$$\frac{33}{5} = \frac{3 \times 5 + 2y}{5}$$

or  $33 - 15 = 2y$

or  $\frac{18}{2} = y$

$y = 9$

155. If a leap year is selected randomly, then what is the probability of having 53 Mondays in this year?

- (1)  $\frac{1}{7}$  (2)  $\frac{2}{7}$   
(3)  $\frac{53}{366}$  (4)  $\frac{52}{365}$

**Answer (2)**

**Sol.** Required probability =  $\frac{2}{7}$

156. If the length of circumference of a circle is 60 cm more than its diameter, then length of its circumference is

- (1)  $14\pi$  cm (2)  $28\pi$  cm  
(3)  $35\pi$  cm (4)  $42\pi$  cm

**Answer (2)**

**Sol.** Circumference =  $60 + 2r$

$$2\pi r = 60 + 2r$$

$$\Rightarrow 2\pi r - 2r = 60$$

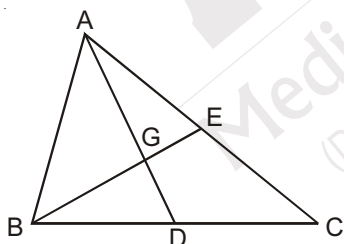
$$\Rightarrow 2r(\pi - 1) = 60$$

$$r = \frac{30}{\pi - 1}$$

$$\therefore 2\pi r = 2\pi \times \frac{30}{\pi - 1} = \frac{60\pi}{\pi - 1}$$

$$= \frac{60}{15} \times 7\pi = 28\pi$$

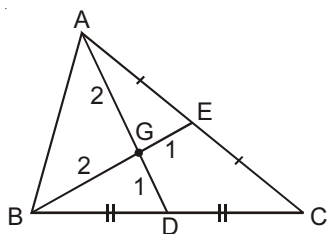
157. In given  $\triangle ABC$ ,  $AD$  and  $BE$  are medians of triangle which intersect each other at point  $G$ . If area of  $\triangle BDG$  is  $1 \text{ cm}^2$ , then what is the area of  $DCEG$ ?



- (1)  $2 \text{ cm}^2$  (2)  $3 \text{ cm}^2$   
(3)  $4 \text{ cm}^2$  (4)  $1 \text{ cm}^2$

**Answer (1)**

**Sol.**



$$\frac{\text{ar}(BDG)}{\text{ar}(ABG)} = \frac{GD}{AG}$$

$$\frac{1}{\text{ar}(ABG)} = \frac{1}{2}$$

$$\text{ar}(ABG) = 2 \text{ cm}^2$$

$$\text{ar}(ADC) = 3 \text{ cm}^2$$

Also,  $\triangle BGD \sim \triangle AGE$  (SAS)

$$\therefore \text{ar}(BGD) = \text{ar}(AGE)$$

$$\begin{aligned} \therefore \text{ar}(DCEG) &= \text{ar}(ADC) - \text{ar}(AGE) \\ &= 3 - 1 = 2 \text{ cm}^2 \end{aligned}$$

158. What is the radian value of angle  $60^\circ 30'$ ?

- (1)  $\frac{\pi^c}{3}$  (2)  $\frac{121}{360} \pi^c$   
(3)  $\frac{121\pi^c}{180}$  (4)  $\frac{121}{540} \pi^c$

**Answer (2)**

**Sol.** Angle =  $60^\circ 30'$

$$= \left(60 + \frac{1}{2}\right)^\circ = \left(\frac{121}{2}\right)^\circ$$

$$180^\circ \rightarrow \pi \text{ radian}$$

$$\therefore 1^\circ = \frac{\pi}{180}$$

$$\therefore \left(\frac{121}{2}\right)^\circ = \frac{\pi}{180} \times \frac{121}{2} = \frac{121}{360} \pi^c$$

159. The diameter of a sphere is decreased by 25%. By what per cent does its curved surface area decrease?

- (1) 25% (2) 56.25%  
(3) 43.75% (4) 62.5%

**Answer (3)**

**Sol.** New diameter,  $d'$

$$d' = d - \frac{25}{100} \times d$$

$$= \frac{3}{4} d$$

Original diameter =  $d$

Original radius =  $r$

$$\text{Original CSA} = 4\pi r^2$$

$$\text{New radius, } r' = \frac{3}{4} r$$

$$\text{New (CSA)}' = 4\pi r'^2$$

$$= 4\pi \left(\frac{3}{4}r\right)^2 = \frac{9\pi r^2}{4}$$

$$\therefore \text{ \%age decrease} = \frac{CSA - (CSA)'}{CSA} \times 100$$

$$= \frac{4\pi r^2 - \frac{9}{4}\pi r^2}{4\pi r^2} \times 100$$

$$= \frac{4 - \frac{9}{4}}{4} \times 100$$

$$= 43.75\%$$

160. Value of  $(x - y)^3 + (y - z)^3 + (z - x)^3$  is

- (1)  $(x - y)^3 (y - z)^3 (z - x)^3$
- (2)  $3(x - y)(y - z)(z - x)$
- (3)  $x^3 + y^3 + z^3 - 3xyz$
- (4)  $x^3 + y^3 + z^3 - 2x^2y - 2y^2z - 2z^2x$

**Answer (2)**

**Sol.**  $a = x - y$ ;  $b = y - z$ ;  $c = z - x$

$$a + b + c = x - y + y - z + z - x = 0$$

$$\therefore a^3 + b^3 + c^3 = 3abc$$

$$= 3(x - y)(y - z)(z - x)$$

161. Match List I with List II correctly and choose the correct code from the following :

**List-I**

- (a) Meeting of the Estates General
- (b) Bastille was destroyed on
- (c) Abolishment of feudal system in France
- (d) Swore of Tennis Court

**List II**

- |                       |                       |
|-----------------------|-----------------------|
| (i) 20th June, 1789   | (ii) 4th August, 1789 |
| (iii) 14th July, 1789 | (iv) 5th May, 1789.   |

- |     | A  | B   | C   | D   |
|-----|----|-----|-----|-----|
| (1) | i  | ii  | iii | iv  |
| (2) | iv | iii | ii  | i   |
| (3) | iv | i   | ii  | iii |
| (4) | i  | iv  | iii | ii  |

**Answer (2)**

162. The state of India where the Jallianwalla Bagh is situated, is

- (1) Haryana
- (2) Uttar Pradesh
- (3) Punjab
- (4) Rajasthan.

**Answer (3)**

163. The German King in 1871 was

- (1) William I
- (2) Napoleon III
- (3) Frederik William IV
- (4) Emmanuel II.

**Answer (1)**

164. Who discovered the spinning jenny ?

- (1) John Ke
- (2) T.E. Nicholson
- (3) Raphael Samuel
- (4) James Hargreaves.

**Answer (4)**

165. The year of the Partition of Bengal was

- (1) 1903
- (2) 1905
- (3) 1907
- (4) 1909

**Answer (2)**

166. Which one of the following countries was not among the Allied Powers ?

- (1) England
- (2) France
- (3) Russia
- (4) Germany

**Answer (4)**

167. When was the publication of Bengal Gazette initiated ?

- (1) 1750
- (2) 1780
- (3) 1850
- (4) 1880

**Answer (2)**

168. Consider the following Points :

- (A) Mahatma Gandhi started salt March with his 78 confidential volunteers.
- (B) Mahatma Gandhi violated the salt law at Dandi on April 20th, 1930.

Choose the correct answer from the codes given below.

- (1) only (A)
- (2) only (B)
- (3) both (A) and (B)
- (4) None of these

**Answer (1)**

169. After which war the British rule was founded in India?

- (1) Battle of Sabrao
- (2) Battle of Panipat
- (3) Battle of Plassey
- (4) Second Anglo Mysore war

**Answer (3)**

170. When was the Great Economic Depression between the two World Wars held ?

- (1) 1921
- (2) 1929
- (3) 1935
- (4) 1939

**Answer (2)**

171. Who composed Ananda Math ?

- (1) Rabindranath Tagore
- (2) Munsii Premchand
- (3) Mahatma Gandhi
- (4) Bankim Chandra Chattopadhyay.

**Answer (4)**

172. 'Khadar' is found in

- (1) the northern mountain region
- (2) Thar desert
- (3) the vast northern plain
- (4) the peninsular plateau.

**Answer (3)**

173. The rising place of the largest river of peninsular plateau is

- (1) Betul
- (2) Nasik
- (3) Jabalpur
- (4) Cuddalore

**Answer (2)**

174. The quantity of rainfall received on the Western Ghats by south-west monsoon is

- (1) 100 - 150 cm
- (2) 150 - 200 cm
- (3) 200 - 250 cm
- (4) above 250 cm'

**Answer (4)**

175. In which Indian forest are silver, fir and pine trees found ?

- (1) Tropical deciduous forest
- (2) Montane forest
- (3) Mangrove forest
- (4) Tropical evergreen rain forest.

**Answer (2)**

176. Match List - I and List II and choose the correct code from the following:

**List - I**

- (A) Northern end
- (B) Southern end
- (C) Eastern end
- (D) Western end

**List - II**

- (i) 8° 4' N
- (ii) 37° 6' N
- (iii) 68° 7' N
- (iv) 97° 25' N

	A	B	C	D
(1)	ii	iii	iv	i
(2)	i	ii	iv	iii
(3)	ii	i	iv	iii
(4)	iii	ii	i	iv

**Answer (3)**

177. Which of the following is the major sugarcane producing state ?

- (1) Uttar Pradesh
- (2) Rajasthan
- (3) West Bengal
- (4) Madhya Pradesh

**Answer (1)**

178. Important deposits of which mineral are found in Koraput in Odisha ?

- (1) Iron ore
- (2) Coal
- (3) Copper
- (4) Bauxite

**Answer (4)**

179. In which year was the first successful cotton textile mill established in India ?

- (1) 1853
- (2) 1854
- (3) 1855
- (4) 1856

**Answer (2)**

180. Indian population policy 2000 not includes

- (1) free education
- (2) free from diseases
- (3) reducing infant mortality rate below 30
- (4) increase the employment opportunities.

**Answer (4)**

181. Gas transportation pipeline which passes through Kota in Rajasthan is

- (1) Guwahati - Barauni - Allahabad - Kanpur
- (2) Barauni - Rajbandh - Haldia
- (3) Hazira - Vijaipur - Jagdishpur
- (4) Salaya - Viramgam - Mathura - Delhi.

**Answer (3)**



182. In which state of India is red and yellow soil found ?

- (1) Chhattisgarh (2) Rajasthan  
(3) Jammu and Kashmir (4) None of these.

**Answer (1)**

183. In which House is the finance bill presented first ?

- (1) Rajya Sabha  
(2) Lok Sabha  
(3) Both Lok Sabha and Rajya Sabha anywhere  
(4) Reserve Bank of India

**Answer (2)**

184. Who among the following is a part of the political executive ?

- (1) District Collector  
(2) Secretary of the Ministry of Home Affairs  
(3) Home Minister  
(4) Director General of Police'

**Answer (3)**

185. Which of the following institutions can make changes to an existing law of our country ?

- (1) Supreme Court of India  
(2) International Court of Justice  
(3) Prime Minister  
(4) Parliament.

**Answer (4)**

186. Which one of the following is considered as a fundamental right according to the Constitution of India ?

- (1) Right to work  
(2) Right to adequate livelihood  
(3) Right to protect one's culture  
(4) Right to get higher education

**Answer (3)**

187. Match the following in reference to constitution making Process :

- |                         |   |
|-------------------------|---|
| (A) B.N. Rao            | (i) President of the Constituent Assembly |
| (B) B.R. Ambedkar       | (ii) Member of the Drafting Committee     |
| (C) Rajendra Prasad     | (iii) Chairman of the Drafting Committee  |
| (D) T.T. Krishnamachari | (iv) Legal Advisor                        |

- (1) (A) - iv, (B) - iii, (c) - i, (D) - ii  
(2) (A) - iv, (B) - ii, (c) - i, (D) - iii  
(3) (A)- i, (B)- iii, (c)- iv, (D)- ii  
(4) (A) - iii, (B) - iv, (c) - i, (D) - ii.

**Answer (1)**

188. Choose the correct statement describing the word 'code of conduct' :

- (A) A set of norms and guidelines to be followed by Political Parties  
(B) A set of norms and guidelines to be followed by candidates in Election  
(C) Guidelines for Election Commission  
(D) Compulsory voting for voters.

(1) A, B, C

(2) A, B

(3) B, C

(4) C, D

**Answer (2)**

189. According to the Constitution of India, how many maximum no. of judges can be appointed in Supreme Court ?

(1) 29 + 1

(2) 30 + 1

(3) 28 + 1

(4) 31 + 1

**Answer (2)**

190. How many members will be nominated in Legislative Council ?

(1) 1/3

(2) 1/2

(3) 1/6

(4) 1/4

**Answer (3)**

191. By which Article of the Constitution of India is the Prime Minister appointed ?

(1) 74<sup>th</sup>

(2) 75<sup>th</sup>

(3) 52<sup>nd</sup>

(4) 61<sup>st</sup>

**Answer (2)**

192. The Vice-President of India is elected by

- (1) elected members of Lok Sabha  
(2) all members of Rajya Sabha  
(3) elected members of Lok Sabha & Rajya Sabha  
(4) all members of Lok sabha, Rajya sabha and all state legislative assemblies

**Answer (3)**

193. Match List - I and List - II and choose the correct code from the given codes :

**List - I**

- (A) Union list
- (B) State list
- (C) Concurrent list
- (D) Residuary powers

**List - II**

- (i) Computer Software
- (ii) Communications
- (iii) Police
- (iv) Forests.

	A	B	C	D
(1)	iii	ii	i	iv
(2)	ii	iii	iv	i
(3)	ii	iv	i	iii
(4)	iv	iii	ii	i

**Answer (2)**

194. The example of capital is

- (1) Water
- (2) Forest
- (3) Climate
- (4) Machine

**Answer (4)**

195. The rabi crop is

- (1) Jowar
- (2) Bajra (Millet)
- (3) Maize
- (4) Wheat.

**Answer (4)**

196. In India the currency note is issued by

- (1) Reserve Bank of India
- (2) State Bank of India
- (3) NABARD
- (4) Bank of India

**Answer (1)**

197. The source of institutional credit is

- (1) Money lender
- (2) Landlord
- (3) Bank
- (4) Relatives.

**Answer (3)**

198. The example of tertiary sector is

- (1) Agriculture
- (2) Fisheries
- (3) making sugar from sugarcane
- (4) Banking services

**Answer (4)**

199. The Government of India enacted the law of "Right to Information" Act in.

- (1) October, 2005
- (2) November, 2006
- (3) December, 2007
- (4) January, 2008

**Answer (1)**

200. The Multinational Company of india is

- (1) Infosys
- (2) Asian Paints
- (3) Tata Motors
- (4) All of these.

**Answer (4)**

